

# Y6 SATs

# Time

Help Code : 041

# BOOSTER

2012A KS2 Q15



These are all times on the same morning.

- A 7:56 am
- B quarter to eight
- C six minutes to eight
- D half past seven

Write the letters for the times in order, starting with the earliest.



\_\_\_\_\_

2010A KS2 Q5



Write these times in order, starting with the shortest.

24 days

10 weeks

1 month

48 hours



--	--	--	--

shortest

2011A KS2 Q7



Holly takes **half an hour** to walk from home to school.

She arrives at school at 8:25 am.

At what time did she leave home?



_____	am
-------	----



Dev leaves school at half past three.

He arrives home at ten past four.

How many minutes did it take him to get home?



_____	minutes
-------	---------

2009A KS2 Q1



Circle the time that is 30 minutes **before** midnight.

12:30 am

12:30 pm

11:30 am

11:30 pm

3 am

2008A KS2 Q15

Here is part of the timetable for Class 6 on a Monday.

am		pm			
10:35	10:55	11:45	12:20	1:15	2:15
break	History	Science	lunch	PE	

Look at the timetable.

How long is it from the **end** of break to the **start** of lunch?



\_\_\_\_\_

Nisha leaves the Science lesson after 25 minutes.

Then she goes to the dentist.

What time does she leave the Science lesson?




2006A KS2 Q6

A clock shows this time.



How long is it from this time until 5pm?




What time was it quarter of an hour before the time on the clock?


 pm

2008A KS2 Q1



Put these times in order, starting with the shortest.

 5 minutes

 20 seconds

 1 minute

 100 seconds

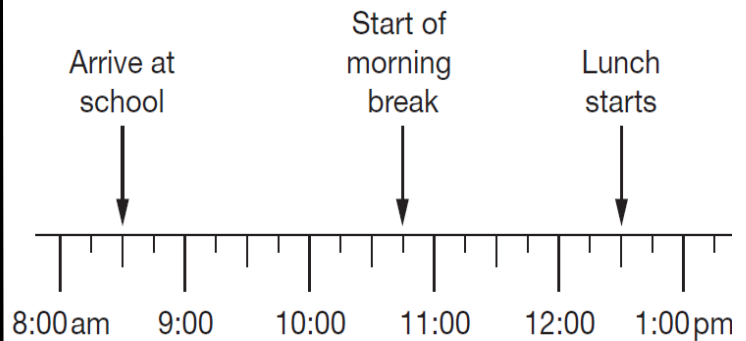





shortest

2007A KS2 Q8

Jamie makes a time line of part of his day.



What time does Jamie's morning break start?


 am

What time does lunch **finish**?


 pm

2005A KS2 Q4



Josh turns the radio on at 7:25am.

How many minutes does he have to wait for the Weather report?

These are the radio programmes one morning.

- 7:00 Music show
- 7:55 Weather report
- 8:00 News
- 8:15 Travel news
- 8:25 Sport
- 8:45 Holiday programme




The Holiday programme lasts for 40 minutes.

At what time does the Holiday programme finish?




2004A KS2 Q23



Here is a part of a train timetable.

Edinburgh	-	09:35	-	-	13:35	-	-
Glasgow	09:15	-	11:15	13:15	-	13:45	15:15
Stirling	09:57	-	11:57	13:57	-	14:29	15:57
Perth	10:34	10:51	12:34	14:34	14:50	15:15	16:35
Inverness	-	13:10	-	-	17:05	-	-

How long does the first train from Edinburgh take to travel to Inverness?




Ellen is at Glasgow station at 1:30pm.

She wants to travel to Perth.


She catches the next train.



At what time will she arrive in Perth?




2004A KS2 Q11



A film starts at 6:45pm.

It lasts 2 hours and 35 minutes.

What time will the film finish?



2003A KS2 Q14

Some children ran in two races on sports day.

Here are their times.



	100m race	800m race
Elise	15.9 seconds	3 minutes 02 seconds
Jake	19.7 seconds	2 minutes 58 seconds
Teri	16.8 seconds	3 minutes 01 seconds
Neil	17.1 seconds	2 minutes 59 seconds
Barry	18.4 seconds	2 minutes 57 seconds


Who finished the 100m race in **second** place?



In the 800m race, how many seconds did Barry finish ahead of Elise?



2001 KS2 Q10



This was the time on Selin's watch when she **set off** for a walk.

What time did the watch show 20 minutes **before** this?



What time did it show an hour and a half **after** she **set off** for the walk?

