

Y6 SATs

Division

Help Code : 004

BOOSTER

You Tube

Calculate $816 \div 24$

2013A KS2 Q19

Show your working

You Tube

Calculate $144 \div 6$

2012A KS2 Q14

You Tube

Calculate $544 \div 32$

2011A KS2 Q21

Show your working

You Tube

Calculate $364 \div 7$

2008A KS2 Q13

You Tube

Calculate $56 \div 4$

2005A KS2 Q5

You Tube

These are the prices of cheese in a shop.

2012A KS2 Q12b



Cheddar cheese
82p for 100 grams

Edam cheese
66p for 100 grams

Cottage cheese
45p for 100 grams

Seb buys some cottage cheese for £1.35

How many grams of cottage cheese does he get?

 g

You Tube

Write the missing number to make this calculation correct.

$11 \times \square = 1111$

2010A KS2 Q23

You Tube

Calculate $48 \div 3$

2009A KS2 Q7

You Tube

Calculate $504 \div 21$

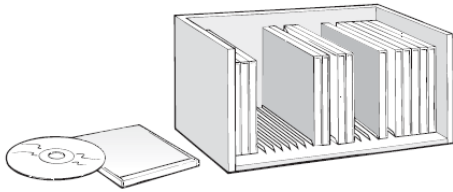
Show your working. You may get a mark.

2007A KS2 Q20



Here is a CD rack.

2006A KS2 Q4



One rack holds 25 CDs.

David has 83 CDs.

How many racks does he need to hold all his CDs?



Calculate $848 \div 16$

2006A KS2 Q22

Show your **working**. You may get a mark.



2004A KS2 Q6



Alan has 45 beans.

He plants 3 beans in each of his pots.

How many pots does he need?

pots



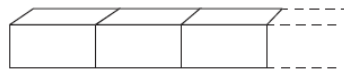
Calculate $900 \div (45 \times 4)$

2004A KS2 Q21

2003A KS2 Q11

Each brick is 12cm long.

Martin makes a line of bricks 132cm long.



How many bricks does he use?



A packet contains 1.5 kilograms of guinea pig food. Remi feeds her guinea pig 30 grams of food each day.

2003A KS2 Q19



How many days does the packet of food last?

Show your **working**. You may get a mark.

days

22

Calculate $924 \div 22$

2002A KS2 Q22

Show your **working**. You may get a mark.



11

Calculate $847 \div 7$



22 Write in the missing number.





2003A KS2 Q22

$50 \div \square = 2.5$

2001A KS2 Q11

A shop sells batteries in **packs of four** and **packs of two**.

2000A KS2 Q6



Simon and Nick want two batteries each.

They buy a **pack of four** and share the cost equally.

How much does each pay?

Show
your **working**.
You may get
a mark.

